

(2½ Hours)

[Total Marks: 75]

- N. B.: (1) **All** questions are **compulsory**.  
 (2) Make **suitable assumptions** wherever necessary and **state the assumptions** made.  
 (3) Answers to the **same question** must be **written together**.  
 (4) Numbers to the **right** indicate **marks**.  
 (5) Draw **neat labeled diagrams** wherever **necessary**.  
 (6) Use of **Non-programmable** calculators is **allowed**.

1. Attempt **any three** of the following: 15

- a. Define Universal Existential Statement and Existential Universal Statement. Give examples of each.
- b. Define Cartesian product. Let  $\mathbf{R}$  denote the set of all real numbers. Describe  $\mathbf{R} \times \mathbf{R}$ .
- c. Find the number of integers between 1 and 250 that are divisible by 2 or 3 or 5 or 7.
- d. Prove that  $(A \cup B) \cap (A \cap B)' = (A - B) \cup (B - A)$
- e. Write the negation of each of the following statements as simply as possible:  
 i. If she works, she will earn money.  
 ii. He swims if and only if the water is warm.  
 iii. If it snows, then they do not drive the car.  
 iv. John is 6 feet tall and he weighs at least 120 Kg.  
 v. The train was late or Amol's watch was slow.
- f. Define the following:  
 i. Argument, Premises  
 ii. Syllogism  
 iii. Explain Modus Ponens and Modus Tollens with examples.

2. Attempt **any three** of the following: 15

- a. Let  
 $Q(n)$  be " $n$  is a factor of 8,"  
 $R(n)$  be " $n$  is a factor of 4,"  
 $S(n)$  be " $n < 5$  and  $n \neq 3$ ,"  
 and suppose the domain of  $n$  is  $\mathbf{Z}^+$ , the set of positive integers. Use the  $\Rightarrow$  and  $\Leftrightarrow$  symbols to indicate true relationships among  $Q(n)$ ,  $R(n)$ , and  $S(n)$ .
- b. Define *necessary and sufficient conditions* and *only if* as applied to universal conditional statements. Rewrite the following statements as formal and informal quantified conditional statements. Do not use the word necessary or sufficient.  
 i. Squareness is a sufficient condition for rectangularity.  
 ii. Being at least 35 years old is a necessary condition for being President of the United States.
- c. A college cafeteria line has four stations: salads, main courses, desserts, and beverages. The salad station offers a choice of green salad or fruit salad; the main course station offers spaghetti or fish; the dessert station offers pie or cake; and the beverage station offers milk, soda, or coffee. Three students, Uta, Tim, and Yuen, go through the line and make the following choices:  
 Uta: green salad, spaghetti, pie, milk  
 Tim: fruit salad, fish, pie, cake, milk, coffee  
 Yuen: spaghetti, fish, pie, soda

Write each of following statements informally and find its truth value.

- i.  $\exists$  an item  $I$  such that  $\forall$  students  $S$ ,  $S$  chose  $I$ .
- ii.  $\exists$  a student  $S$  such that  $\forall$  items  $I$ ,  $S$  chose  $I$ .
- iii.  $\exists$  a student  $S$  such that  $\forall$  stations  $Z$ ,  $\exists$  an item  $I$  in  $Z$  such that  $S$  chose  $I$ .
- iv.  $\forall$  students  $S$  and  $\forall$  stations  $Z$ ,  $\exists$  an item  $I$  in  $Z$  such that  $S$  chose  $I$ .
- d. Define a prime number and composite number. Give symbolic definitions of the same. Disprove the following by giving two counter examples:
  - i. For all real numbers  $a$  and  $b$ , if  $a < b$  then  $a^2 < b^2$ .
  - ii. For all integers  $n$ , if  $n$  is odd then  $(n - 1)/2$  is odd.
  - iii. For all integers  $m$  and  $n$ , if  $2m + n$  is odd then  $m$  and  $n$  are both odd.
- e. Define divisibility. Hence prove that for all integers  $a$ ,  $b$ , and  $c$ , if  $a \mid b$  and  $a \mid c$  then  $a \mid (b + c)$  and  $a \mid (b - c)$ .
- f. Use the quotient-remainder theorem with  $d = 3$  to prove that the product of any three consecutive integers is divisible by 3. Use the mod notation to rewrite the result

3. Attempt **any three** of the following:

15

- a.
  - i. Write the following as a single summation:  

$$3 \sum_{k=1}^n (2k - 3) + \sum_{k=1}^n (4 - 5k)$$
  - ii. Write the following as a single product:  

$$\left( \prod_{k=1}^n \frac{k}{k+1} \right) \cdot \left( \prod_{k=1}^n \frac{k+1}{k+2} \right)$$
  - iii. Find  $1(1!!) + 2(2!!) + 3(3!) + \dots + m(m!!)$ ;  $m = 2$
  - iv. Find  

$$\left( \frac{1}{1+1} \right) \left( \frac{2}{2+1} \right) \left( \frac{3}{3+1} \right) \dots \left( \frac{k}{k+1} \right)$$
;  $k = 3$
  - v. Prove that for all nonnegative integers  $n$  and  $r$  with  $r + 1 \leq n$ ,  

$$\binom{n}{r+1} = \frac{n-r}{r+1} \binom{n}{r}$$
- b. Prove that  $7^{2n} + (2^{3n-3})(3^{n-1})$  is divisible by 25  $\forall n \in \mathbb{N}$
- c. Determine the sequence whose recurrence relation is  $a_n = 4a_{n-1} + 5a_{n-2}$  with  $a_1 = 2$  and  $a_2 = 6$
- d.
  - i. Define  $G: J_5 \times J_5 \rightarrow J_5 \times J_5$  as follows: For all  $(a, b) \in J_5 \times J_5$ ,  

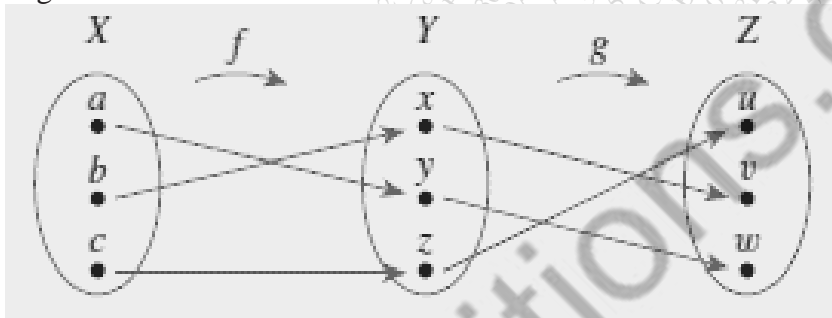
$$G(a, b) = ((2a + 1) \bmod 5, (3b - 2) \bmod 5)$$
 Find:  $G(4, 4)$ ,  $G(2, 1)$ ,  $G(3, 2)$ ,  $G(1, 5)$
  - ii. Let  $F$  and  $G$  be functions from the set of all real numbers to itself. Define the product functions  $F \cdot G: \mathbb{R} \rightarrow \mathbb{R}$  and  $G \cdot F: \mathbb{R} \rightarrow \mathbb{R}$  as follows: For all  $x \in \mathbb{R}$ ,  

$$(F \cdot G)(x) = F(x) \cdot G(x)$$

$$(G \cdot F)(x) = G(x) \cdot F(x)$$
 Does  $F \cdot G = G \cdot F$ ? Explain.



- e.
- i. Define Floor:  $\mathbf{R} \rightarrow \mathbf{Z}$  by the formula  $Floor(x) = \lfloor x \rfloor$ , for all real numbers  $x$ .
    - Is Floor one-to-one? Prove or give a counterexample.
    - Is Floor onto? Prove or give a counterexample.
  - ii. Let  $S$  be the set of all strings of 0's and 1's, and define  $l: S \rightarrow \mathbf{Z}^{nonneg}$  by  $l(s) =$  the length of  $s$ , for all strings  $s$  in  $S$ .
    - Is  $l$  one-to-one? Prove or give a counterexample.
    - Is  $l$  onto? Prove or give a counterexample.
- f. Let  $X = \{a, c, b\}$ ,  $Y = \{x, y, z\}$ , and  $Z = \{u, v, w\}$ . Define  $f: X \rightarrow Y$  and  $g: Y \rightarrow Z$  by the arrow diagrams below.

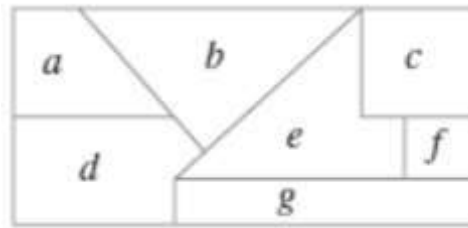


Find:  $g \circ f, (g \circ f)^{-1}, f^{-1}, g^{-1}, f^{-1} \circ g^{-1}$ .  
 How  $(g \circ f)^{-1}$  and  $f^{-1} \circ g^{-1}$  are related?

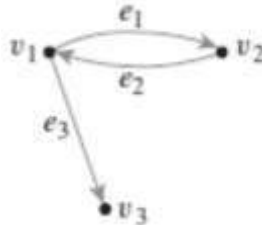
4. Attempt any three of the following:

15

- a Draw the directed graph for the following relations:
- i. A relation  $R$  on  $A = \{0, 1, 2, 3\}$  by  $R = \{(0, 0), (1, 2), (2, 2)\}$ .
  - ii. Let  $A = \{2, 3, 4, 5, 6, 7, 8\}$  and define a relation  $R$  on  $A$  as follows:  
 For all  $x, y \in A, x R y \Leftrightarrow x \mid y$ .
- b Determine whether the following relations are reflexive, symmetric, transitive or none of these. Justify your answer.
- i.  $R$  is the “greater than or equal to” relation on the set of real numbers:  
 For all  $x, y \in \mathbf{R}, x R y \Leftrightarrow x \geq y$ .
  - ii.  $D$  is the relation defined on  $\mathbf{R}$  as follows:  
 For all  $x, y \in \mathbf{R}, x D y \Leftrightarrow xy \geq 0$ .
- c Let  $\mathbf{R}$  be the set of all real numbers and define a relation  $R$  on  $\mathbf{R} \times \mathbf{R}$  as follows: For all  $(a, b)$  and  $(c, d)$  in  $\mathbf{R} \times \mathbf{R}, (a, b) R (c, d) \Leftrightarrow$  either  $a < c$  or both  $a = c$  and  $b \leq d$ .  
 Is  $R$  a partial order relation? Prove or give a counterexample.
- d Imagine that the diagram shown below is a map with countries labeled  $a-g$ . Is it possible to color the map with only three colors so that no two adjacent countries have the same color? To answer this question, draw and analyze a graph in which each country is represented by a vertex and two vertices are connected by an edge if, and only if, the countries share a common border.



e i. Find the adjacency matrix of the following graph:



ii. Find directed graphs that have the following adjacency matrix:

$$\begin{bmatrix} 1 & 0 & 1 & 2 \\ 0 & 0 & 1 & 0 \\ 0 & 2 & 1 & 1 \\ 0 & 1 & 1 & 0 \end{bmatrix}$$

f For the following either draw the graph as per the specifications or explain why no such graph exists:

- i. Graph, circuit-free, nine vertices, six edges
- ii. Tree, six vertices, total degree 14
- iii. Tree, five vertices, total degree 8
- iv. Graph, connected, six vertices, five edges, has a nontrivial circuit
- v. Graph, two vertices, one edge, not a tree

5. Attempt any three of the following:

15

- a. There are four bus lines between A and B and three bus lines between B and C. In how many ways can a man travel
  - i. by bus from A to C by way of B?
  - ii. round-trip by bus from A to C by way of B?
  - iii. round-trip by bus from A to C by way of B if he does not want to use a bus line more than once?
- b.
  - i. How many ways can the letters of the word ALGORITHM be arranged in a row?
  - ii. How many ways can the letters of the word ALGORITHM be arranged in a row if A and L must remain together (in order) as a unit?
  - iii. How many ways can three of the letters of the word ALGORITHM be selected and written in a row?
  - iv. How many ways can six of the letters of the word ALGORITHM be selected and written in a row if the first letter must be A?
  - v. How many ways can the letters of the word ALGORITHM be arranged in a row if the letters GOR must remain together (in order) as a unit?

- c.
- i. If 4 cards are selected from a standard 52-card deck, must at least 2 be of the same suit? Why?
  - ii. If 5 cards are selected from a standard 52-card deck, must at least 2 be of the same suit? Why?
  - iii. A small town has only 500 residents. Must there be 2 residents who have the same birthday? Why?
  - iv. Given any set of four integers, must there be two that have the same remainder when divided by 3? Why?
  - v. Given any set of three integers, must there be two that have the same remainder when divided by 3? Why?
- d.
- i. How many distinguishable ways can the letters of the word *HULLABALOO* be arranged in order?
  - ii. How many distinguishable orderings of the letters of *HULLABALOO* begin with U and end with L?
  - iii. How many distinguishable orderings of the letters of *HULLABALOO* contain the two letters HU next to each other in order?
- e. A bakery produces six different kinds of pastry, one of which is eclairs. Assume there are at least 20 pastries of each kind.
- i. How many different selections of twenty pastries are there?
  - ii. How many different selections of twenty pastries are there if at least three must be eclairs?
  - iii. How many different selections of twenty pastries contain at most two eclairs?
- f. A drug-screening test is used in a large population of people of whom 4% actually use drugs. Suppose that the false positive rate is 3% and the false negative rate is 2%. Thus a person who uses drugs tests positive for them 98% of the time, and a person who does not use drugs tests negative for them 97% of the time.
- i. What is the probability that a randomly chosen person who tests positive for drugs actually uses drugs?
  - ii. What is the probability that a randomly chosen person who tests negative for drugs does not use drugs?